



# DELHI PUBLIC SCHOOL VISAKHAPATNAM ASSIGNMENT



## Half Yearly Examination Revision 2025-26

**Class: VII**

**Date of Submission: on or before 06.09.2025**

### **Subject: ENGLISH**

1) Read the passage carefully and answer the following questions.

Once Akbar decided to hold a grand feast. He personally invited his courtiers and many others. It was a feast to be remembered and talked about. Attending a grand feast was worth walking even a hundred miles. Obviously, everybody flocked to the place.

It was indeed a feast fit for gods. All kinds of dishes and food delicacies were served. All the courtiers viewed with one another to catch the emperor's eye. As usual Akbar's eye was on his favourite Birbal. He made Birbal sit next to him. He enjoyed the meal thoroughly as Birbal entertained him with his witty stories throughout the meal.

After the meal, different fruits were served. Akbar and Birbal sat conversing together over a bowl of dates. While talking they kept throwing the date seeds under their chairs.

Noticing the pile of dates under Birbal's chair Akbar got an idea and thought of having fun at Birbal's expense. He slowly pushed his heap of seeds into that of Birbal's with his foot. Birbal did not notice Akbar doing that.

Suddenly pretending to be surprised Akbar spoke loudly, "Birbal! I did not know you were so greedy. Is it wise to eat so many dates?"

There was a hush. Everybody stopped talking and turned to look at Birbal. Birbal peeped under his chair and saw a huge heap of date seeds while there was nothing under the king's chair. He understood it to be Akbar's pranks. Akbar was waiting to see as to how Birbal would tackle the embarrassing situation.

Unnerved, Birbal turned towards Akbar and answered loud enough for everyone to hear. Your Majesty, I admit I am a greedy man. But I have eaten only the fruit having thrown away the seeds while you have eaten the seeds along with fruits.

Now, it was Akbar's turn to get embarrassed. As usual, Birbal had the last laugh.

1A) Answer the following questions:

- i) Who organized the grand feast?
- ii) Where did Akbar make Birbal sit during the feast?
- iii) What did Birbal do to entertain Akbar during the meal?
- iv) What prank did Akbar play on Birbal?
- v) How did Birbal cleverly reply to Akbar?

1B) Tick the correct answer:

- i) Why did Akbar invite his courtiers?  
a) for a feast                      b) for a war council                      c) for a discussion
- ii) Which fruit did Akbar and Birbal eat after the meal?  
a) apples                              b) grapes                              c) dates
- iii) What did Akbar pretend to be surprised about?  
a) Birbal's silence                      b) Birbal's greediness                      c) Birbal's wit
- iv) Who had the last laugh in the story?  
a) the courtiers                      b) Akbar                              c) Birbal
- v) Where did Akbar and Birbal throw the date seeds?  
a) under their chairs                      b) in a bowl                              c) on the table

2) Rearrange the following words to form meaningful sentences:

- i) kalamkari/is/painted/hand/type/of/a/textile
- ii) Andhra Pradesh/Telangana/common/in/and/is/kalamkari

- iii) images/mythology/Hindu/include/kalamkari/from
- iv) colours/earthy/lot/kalamkari fabrics/a/use/of
- v) Gujarat/in/most popular/is/Bandhani

3) Read the passage carefully. Identify the errors and rewrite it correctly:

Last Sunday, Rohan and his friend goes to the park near their house. They was very excited because a fair was organize there. At the entrance, they see many colourful balloon. Rohan buy two tickets and entered with his friend. The fair were crowded with children and families. They enjoyed the rides and play many games. Suddenly, it begin to rain heavily and people run for shelter. Rohan and his friend find a safe place under a tent. After few minutes, the rain has stopped and the sky became clear. They continue their fun and eat delicious snacks. Everyone were happy and enjoyed the festival with great joy. In the evening, they return home with sweet memories.

4) Rewrite the following sentences in the given voice:

- i) The song was sung by Lata (Active voice)
- ii) He will complete the work (Passive voice)
- iii) They speak English (Passive voice)
- iv) The prize was won by Raj (Active voice)
- v) The teacher punished the boy (Passive voice)

5) Fill in the blanks with correct form of verb:

- i) She \_\_\_\_ (go) to school everyday.
- ii) They \_\_\_\_ (play) football now.
- iii) My father \_\_\_\_ (is/are) reading a newspaper.
- iv) The sun \_\_\_\_ (rise) in the east.
- v) We \_\_\_\_ (visit) the zoo tomorrow.

6) Convert the degree of adjective as instructed and rewrite the sentences without changing their meaning:

- i) This flower is more beautiful than all other flowers in the garden. (superlative)
- ii) Mount Everest is the highest mountain in the world. (comparative)
- iii) She is not more beautiful than her sister. (positive)
- iv) No other player is as great as Sachin Tendulkar. (superlative)
- v) My handwriting is as neat as yours. (comparative)

7) Fill in the blanks with correct article:

- i) He wants to be \_\_\_\_ Engineer.
- ii) Yesterday, I met \_\_\_\_ European tourist.
- iii) We should speak \_\_\_\_ truth.
- iv) She bought \_\_\_\_ one-rupee coin.
- v) She found \_\_\_\_ alarm ringing near the bed.

### Subject: MATHEMATICS

1. Varsha spends  $\frac{3}{5}$  of her income on households expenses and  $\frac{1}{7}$  of her income on personal expenses.

If her monthly income is Rs.35000, find her monthly savings.

2. In a charity show Rs.6496 were collected by selling some tickets. If the price of each ticket was Rs. $50\frac{3}{4}$ , how many tickets were sold?

3. Find  $x$  in the figure.

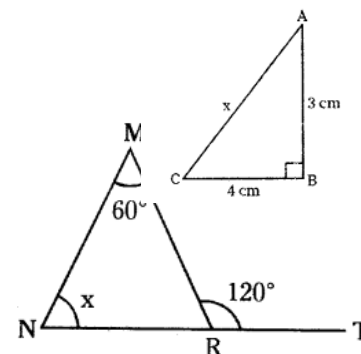
4. Find the value of i)  $3\frac{1}{8}$  of  $4\frac{10}{11}$  ii)  $4 \div 2\frac{2}{5}$  iii)  $13.01 \times 5.01$

iv)  $40.32 \div 9.6$

5. Two supplementary angles differ by  $34^\circ$ . Find the angles.

6. A certain freezing process requires that room temperature be lowered from  $30^\circ\text{C}$  at the rate of  $3^\circ\text{C}$  every hour. What will be the room temperature 4 hours after the process begins?

7. In the figure find  $x$ .



8. Mary played 10 cricket matches. She scored 45,36,50,27,36,52,50,43,50 and 47 points. Find the mean, range, mode and median of the given data.

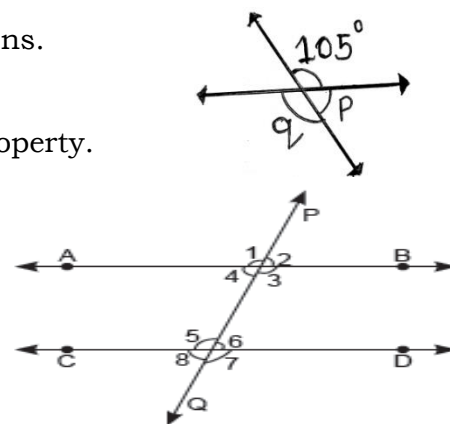
9. Find the value of  $p$  and  $q$  in the adjoining figure and also write reasons.

10. Verify  $9 \times [6 + (-1)] = 9 \times 6 + 9 \times (-1)$

11. In the given figure,  $AB \parallel CD$ , intersect by a transversal  $PQ$ , If  $\angle 1 = 55^\circ$ , Find the values of the unknown angles by mentioning the property.

12. The results of pass percentage of class X and IX in an examination (like periodic test) for 5 years are given in the following table. Draw a double bar graph for the above data.

Year	Class x	Class IX
2004-2005	89	95
2005-2006	92	90
2006-2007	90	85
2007-2008	93	95
2008-2009	95	90



### Subject: SCIENCE

I-Fill in the blanks

- Partial parasites depend on the host for \_\_\_\_\_ and \_\_\_\_\_.
- \_\_\_\_\_ is the hardest substance that coats the teeth.
- The SI unit of temperature is \_\_\_\_\_.
- Angora wool is obtained from an animal called \_\_\_\_\_.
- We receive heat from sun by \_\_\_\_\_.
- Animals that stay awake at night and sleep in the morning are called \_\_\_\_\_ animals.
- \_\_\_\_\_ soil is ideal for growing plants.

II. Following questions consist of two statements – Assertion (A) and Reason (R). Answer these questions selecting the appropriate option given below:

- Both A and R are true and R is the correct explanation of A.
- Both A and R are true but R is not the correct explanation of A.
- A is true but R is false.
- A is false but R is true.

Assertion (A): Some desert plants are nocturnal.

Reason (R): In desert the temperatures are very high during the day.

2. Assertion (A): The salt formed by the neutralisation of a strong acid by a weak base is acidic in nature.

Reason (R): There is formic acid in ant's.

III. Answer the following questions:

- Discuss the adaptations displayed by the following.  
(i) Meerkat (ii) Emperor penguins (iii) Toucans
- Why is soil regarded as a non-renewable resource although more soil is continuously being formed in nature by weathering.
- Tina is suffering from indigestion due to acidity. Is it advisable to give her the lemon juice in this situation and why? What should she take to get well?
- Balance the equations:  
i) Potassium + Chlorine gas  $\rightarrow$  Potassium chloride  
ii) Water  $\rightarrow$  Hydrogen + Oxygen
- Draw the labelled diagrams of the following:  
i) Sea breeze (ii) Thermos flask (iii) Soil Profile (iii) life cycle of silk moth.

6. Why are some plants heterotrophic?
7. With the help of diagrams depict the process of nutrition in amoeba.
8. Define (a) Shearing (b) Reeling
9. Give two examples from your daily life experiences which show solids expand on heating.

IV. CASE BASED QUESTION: Answer the given questions based on the diagram and passage:

Q1. What will happen when a blue litmus paper is put in test tube A? Why?

Q2. What will be the result when contents of test tube C is put in test tube B? What reaction is this?

Q3. What will happen when little bit of liquid of test tube B is added to a china rose solution?

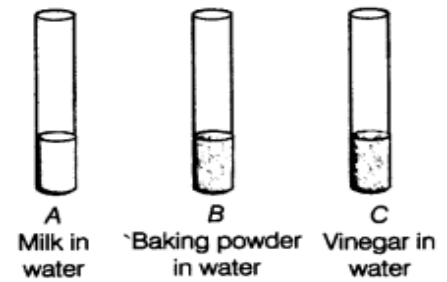
Q4. What is the name of the acid present in Vinegar?

2. The size of the particles in a soil has an influence on its properties. Sand particles are quite large. They cannot fit close together, so there are large spaces between them. These spaces are filled with air. Water can drain quickly through the spaces between the sand particles. So, sandy soils tend to be light, well aerated and rather dry. Clay particles, being much smaller, pack tightly together, leaving little space for air. Unlike sandy soil, water can be held in the tiny gaps between the particles of clay, so clayey soils have less air. But they are heavy as they hold more water than the sandy soils. The best topsoil for growing plants is loam. Loamy soil is a mixture of sand, clay and another type of soil particle known as silt.

Q1. Which soil is heavier; clayey or sandy soil?

Q2. Why is soil regarded as a non-renewable resource although more soil is continuously being formed in nature by weathering ?

Q3. Why there is little space for air in clay particles.



### Subject: SOCIAL SCIENCE

1. What did the new dynasties do to gain acceptance
2. What were the activities associated with Chola temples?
3. According to the 'circle of justice' why was it important for military commanders to keep the interests of the peasantry in mind?
4. What is meant by the 'internal' and 'external' frontiers of the Sultanate?
5. What was the role of the zamindar in Mughal administration?
6. How important was the income from land revenue to the stability of the Mughal Empire?
7. What do you understand by the term "all persons are equal before the law"? Why do you think it is important in a democracy?
8. In a democracy why is Universal Adult Franchise important?
9. What are the different ways through which the government can take steps to provide healthcare for all?
10. What steps has the Costa Rican Government taken to improve health services to the people of the states?
11. Improvement in water sanitation can control many diseases. Explain with the help of examples.
12. What is the difference between the work that MLAs do in the Assembly and the work done by government departments?
13. What are exogenic and endogenic forces?
14. How are extrusive and intrusive rocks formed?
15. How are beaches formed?
16. What are the uses of rocks?
17. Amount of insolation decreases from the equator towards poles. Give reason.
18. What is the atmosphere? What is the importance of atmosphere.

### Subject: हिंदी (द्वितीय भाषा)

प्रश्न 1. (क)- आपका नाम राजू या रजनी है। आप कक्षा सातवीं में पढ़ते/पढ़ती हैं। आपका पहचान पत्र (आईडी कार्ड) स्कूल में कहीं खो गया है। इसके लिए एक सूचना तैयार करें।

अथवा

(ख) आप अपने विद्यालय के सचिव हैं व विद्यालय में दीपावली मेला आयोजित करना चाहते हैं। उससे संबंधित छात्रों के लिए 25-30 शब्दों में सूचना लिखिए।

प्रश्न 2- दिए गए चित्रों को देखकर 40-50 शब्दों में उनका वर्णन कीजिए।



प्रश्न 3- (क) विद्यालय के प्रधानाचार्य को अवकाश के लिए प्रार्थना-पत्र लिखिए।

अथवा

(ख) अपने विद्यालय के प्रधानाचार्य को अपना सेक्शन बदलवाने के लिए प्रार्थना-पत्र लिखिए।

प्रश्न 4- निम्नलिखित में से किसी एक विषय पर अनुच्छेद लिखें।

आदर्श विद्यार्थी

स्वास्थ्य ही सबसे बड़ा धन

सच्चा मित्र

समाचार-पत्रों की उपयोगिता

बाल महाभारत

1. निम्नलिखित प्रश्नों के उत्तर पढ़ें।

पाठ 6- कुंती

1. राजा सूरसेन सेन कौन थे? श्री कृष्ण के पितामह थे।
2. ऋषि दुर्वासा कुंती से क्यों प्रसन्न थे? उसकी सेवा से प्रसन्न थे।
3. कर्ण कौन थे? कुंती के पुत्र थे।

पाठ 7 भीम

1. धृतराष्ट्र के कितने पुत्र थे? 100 पुत्र थे।
2. पांडु के कितने पुत्र थे? पांच पुत्र थे।
3. शरीर बल में सबसे बढ़कर कौन था? भीम

पाठ 8- कर्ण

1. इंद्र क्या देखकर चकित रह गए? इंद्र कर्ण की दानवीरता देखकर चकित हो गए।
2. कौन दानवीर थे? कर्ण दानवीर थे।

पाठ 9- द्रोणाचार्य

1. द्रोणाचार्य कौन थे? द्रोणाचार्य महर्षि भारद्वाज के पुत्र थे। या पांडवों के गुरु थे।
2. द्रोणाचार्य के गुरु कौन थे? परशुराम
3. द्रोणाचार्य के किसी एक शिष्य का नाम बताइए। अर्जुन

पाठ 10- लाख का घर

1. दुर्योधन की जलन का क्या कारण था? पांडवों का शक्तिशाली होना।
2. शकुनि कौन था? दुर्योधन का मामा।
3. दुर्योधन के सलाहकार कौन थे? शकुनि और कर्ण

पाठ 11 पांडवों की रक्षा

1. कौन-कौन वारणावत गए थे? पांच पांडव और माता कुंती
2. लाख के भवन से बचकर पांडव कहां चले गए? जंगल चले गए।
3. बकासुर कौन था? बकासुर एक बड़ा अत्याचारी राक्षस था।

पाठ 12 द्रौपदी स्वयंवर

1. द्रौपदी कौन थीं? पांचाल नरेश की कन्या थीं।
2. द्रौपदी स्वयंवर किसने जीता? अर्जुन ने जीता।

3. पांचाल देश में भी पांडव ब्राह्मण वेश में क्यों गए? ताकि उसे कोई पहचान न सके।

पाठ 13 इंद्रप्रस्थ

1. बाद में खांडवप्रस्थ का नाम क्या रखा गया? इंद्रप्रस्थ
2. कर्ण ने दुर्योधन को क्या सलाह दी? युद्ध करने की सलाह दी।
3. इंद्रप्रस्थ को किसने राजधानी बनाई? पांडवों ने

पाठ 14- शकुनि

1. शकुनि कौन था? दुर्योधन का मामा था।

पाठ 15- चौसर का खेल

1. विदुर पांडवों को किस बात के लिए न्योता देने गए थे? चौसर के खेल के लिए।
2. चौसर का खेल किसने जीता? दुर्योधन।
3. दूसरी बार चौसर खेल का परिणाम क्या हुआ? पांडवों को वन जाना पड़ा।

पाठ 17- धृतराष्ट्र की चिंता

1. द्रौपदी के पुत्र कहां गए? पांचाल देश गए।
2. अभिमन्यु कहां गए? द्वारिका गए।
3. कौन-कौन वन गए? पांच पांडव और द्रौपदी।

पाठ 18- भीम और हनुमान

1. बंदर ने अपना परिचय क्या दिया? बंदर ने कहा कि वह ही हनुमान है।
2. भीम जब फूल लाने गए तो रास्ते में उनकी भेंट किससे हुई? हनुमान से।

### Subject: తెలుగు ( ద్వితీయ భాష )

1. మాయాకంబళి కథను మీ మాటల్లో వ్రాయండి?
2. మీ చిన్నప్పటి అనుభవాలు వ్రాయండి?
3. చిన్న పిల్లల చేష్టలు గురించి మీ మాటల్లో వ్రాయండి?
4. మళ్ళీచెట్టు తనకు -గ్రామానికి సంబంధించిన సంబంధాన్ని గురించి మీ మాటలలో వ్రాయండి.
- II. క్రింద ఇచ్చిన పదాలను విడదీయండి:  
ఏమేమి, సంక్రాంతికింటికి, వానికెయ్యడల, చిన్నదైన, లేనిదంటూ, లోకములెల్ల
- III. పదాలను కలిపి వ్రాయండి:  
మనము+అంతా, మేన+అత్త, మీరు+ఏమిటి, ఏమి+అంటారు,  
భావము+ఏమి, రాముడు+అతడు, అతను+ఎవరు
- IV. క్రింది పద్యం పూరించి, భావముతో వ్రాయుము:  
ధనమే మైత్రిని.....గువ్వల చెన్నా!  
వృద్ధజన సేవ.....కుమారా!  
గురుభక్తియు.....లక్షణముల్!
- V. వ్యాసములు:  
కంప్యూటర్, క్రమశిక్షణ
- VI. వ్యాకరణ ప్రశ్నలు  
1. సంధి అనగా ఏమి?  
2. తెలుగు సంధులు పేర్లు వ్రాయుము?  
3. సంస్కృత సంధులు పేర్లు వ్రాయుము?  
4. అకార సంధి అంటే ఏమిటి?  
5. సవర్ణ దీర్ఘ సంధి అంటే ఏమిటి?

### Subject: हिंदी (तृतीय भाषा)

1. गद्यांश को पढ़कर प्रश्नों के उत्तर एक शब्द में लिखिए।

बंदर और खरगोश एक जंगल में रहते थे। वे बहुत अच्छे दोस्त थे और साथ-साथ खेलते रहते थे। एक दिन उन दोनों ने नदी के पास जाकर खेलने की योजना बनाई। खेलते-खेलते बंदर एक पेड़ पर चढ़ गया और खरगोश नदी के किनारे बैठ गया। बंदर ने खरगोश को ऊपर से देखा और बोला, “तुम क्यों नहीं नहा रहे हो ? नदी में तैरना तो बहुत मजेदार होता है।” खरगोश ने मुँह बनाते हुए कहा, “मैं तैरना नहीं जानता। मुझे पानी में जाना पसंद नहीं है।”

प्र. (क) बंदर और खरगोश कहाँ रहते थे?

5.शारदा-2 पाठ:-3,4 अनुवाद वाक्यानि अभ्यासं कुरुत।